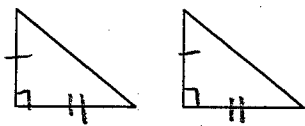
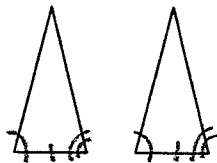


Proving Triangles Congruent: Write the method that can be used to prove triangles congruent on the blank. If the triangles cannot be proven to be congruent, write not possible.

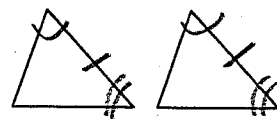
1.



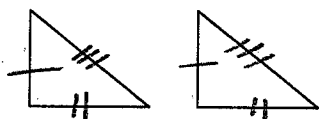
2.



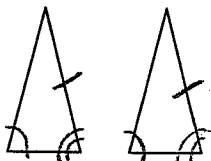
3.



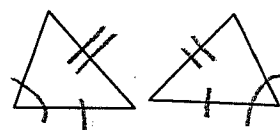
4.



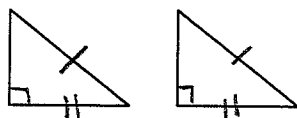
5.




6.



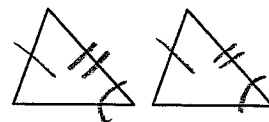
7.



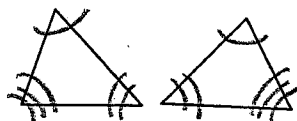
8.



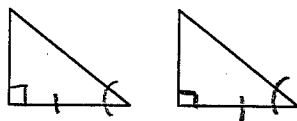
9.



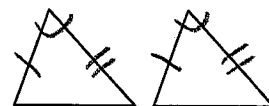
10.



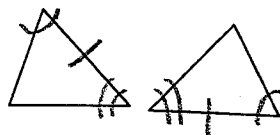
11.



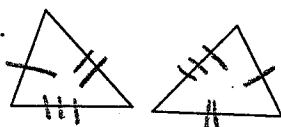
12.



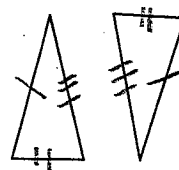
13.



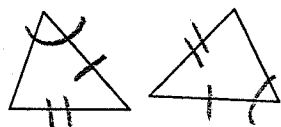
14.



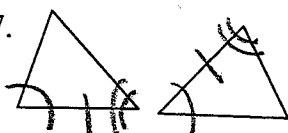
15.



16.



17.



18.